

Submit The Assessment

IIMU APTITUDE TEST

| Section | Questions | Time Limit | Status |
|--|-----------|---------------|-----------------------|
| 1 Verbal Ability And Reading Comprehension | 10 | No Time Limit | Begin |
| 2 Logical Reasoning | 10 | No Time Limit | Begin |
| 3 Quantitative Ability And Data Interpretation | 10 | No Time Limit | Begin |

Submit The Assessment

Multiple Choice Question

What letter comes next in the given sequence?

b, c, e, g, k, ?

m

p

l

n

Multiple Choice Question

Martin is currently 15 years old, and his sister is exactly twice his age. How old will Martin's sister be when Martin turns 19?

30 years

33 years

34 years

38 years

Multiple Choice Question

What number comes next in the sequence?

4, 16, 26, 34, 40, ?

45

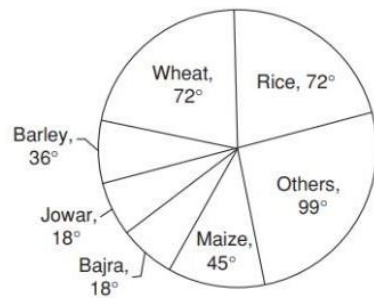
46

43

44

Directions: Study the following pie chart carefully and answer the question given below it.

The pie-chart provided below gives the distribution of land (in a village) under various food crops.



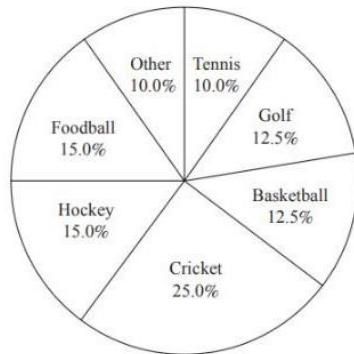
Question:

Which combination of three crops contributes to more than 50% of the total area under food crops?

- Wheat, rice and maize
- Wheat, rice and jowar
- Wheat, rice and bajra
- Rice, barley and maize

Directions: Study the following pie chart carefully and answer the question given below it.

Percent of Money Spent on Various Sports for One Year



Question:

If the total amount spent during the year was \$12,000,000, how much was spent on basketball?

- \$1,250,000
- \$1,200,000
- \$1,000,000
- \$1,500,000

Multiple Choice Question

Jennifer drives her car 40 miles on city roads at 20 mph and 180 miles on the interstate highway at 60 mph. What is the average speed of her entire trip?

44 mph

52 mph

58 mph

40 mph

Multiple Choice Question

Justin resides on Meadows Street. There have been 16 houses on his street to the right and 17 houses to the left of his house. Last year, 5 new houses were constructed on the same street. How many total houses are there on the street?

 40 39 38 37

Multiple Choice Question

A house is built by 20 workers in 30 days. How many workers will be needed to complete the work in 15 days?

20

40

45

52

Multiple Choice Question

P and Q can do a work in 30 days. Q and R can do the same work in 24 days and R and P in 20 days. They started the work together, but Q and R left after 10 days. How many days more will P take to finish the work?

 10 15 18 22

Multiple Choice Question

Excluding stoppages, the speed of a bus is 54 km/h, and including stoppages, it is 45 km/h. For how many minutes does the bus stop per hour?

4 minutes

6 minutes

8 minutes

10 minutes

Multiple Choice Question

In the given question, a few statements have been given followed by two conclusions based on them. Consider the statements to be true, and answer which of the given conclusions logically follows the statement.

Statement I: Some plums are peaches.

Statement II: All peaches are apples.

Statement III: Some apples are mangoes.

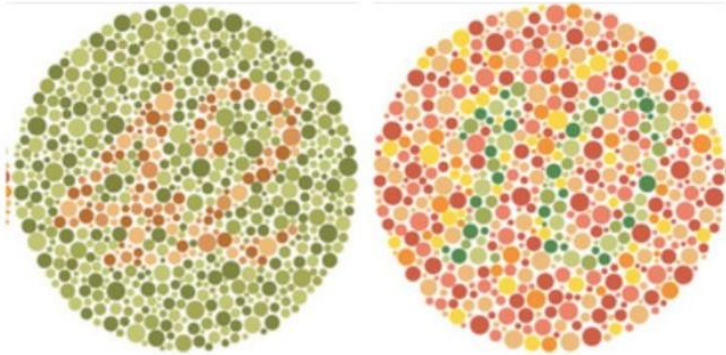
Conclusion I: Some mangoes are peaches.

Conclusion II: Some apples are peaches.

- If only conclusion I follow.
- If only conclusion II follows.
- If conclusions I and II both follow.
- If either conclusion I or conclusion II follows.

Multiple Choice Question

Find the sum of the numbers hidden in the image.



120

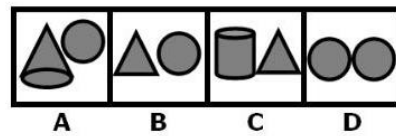
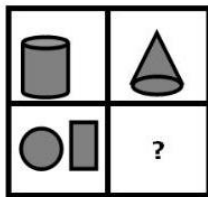
20

52

112

Multiple Choice Question

Choose one of the 4 shapes that will complete the pattern on the left.

 A B C D

Multiple Choice Question

You work for a shipping company in their Operations Department. As per the regulations, there are 3 types of storage choices for shipping containers.

- The container must be sent to a Freight Station if it holds items weighing over 500 pounds.
- The container must be sent to a Warehouse if it holds items weighing less than 500 pounds.
- Containers with medicines, reactive chemicals, or hazardous materials must be sent to a Bonded Warehouse.

What is the storage choice for a 450-pound container containing steel tubes?

- Freight Station
- Bonded Warehouse
- Warehouse
- Either Warehouse or Bonded Warehouse.

Multiple Choice Question

Family Puzzle

P and Q are brothers of R.

Q is the son of S and T.

S is the daughter of U.

A is the father-in-law of T.

B is the son of U.

Question:

How is Q related to A?

Brother

Grandson

Granddaughter

Son

Multiple Choice Question

Select the option that matches the question.

1. ZY96828

2. 5696343

1. ZY96288
2. 5696433


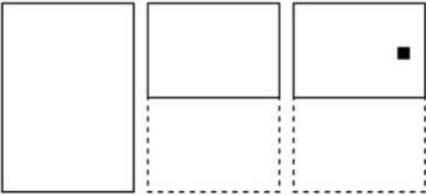
1. ZY96828
2. 5696343

1. ZY69828
2. 5966343

1. ZY96882
2. 5696343

Multiple Choice Question

A folded sheet of paper is depicted in the drawings. The dashed lines represent the entire page, whereas each drawing depicts a single fold.
 The black square shows where a hole was punched.
 When the sheet is unfolded, where do the holes appear?



2C, 5C

3D, 3D

2D, 5D

2C, 2D

Multiple Choice Question

Professor: If both parents have type O blood then their children can only have type O blood. This is a genetic law.

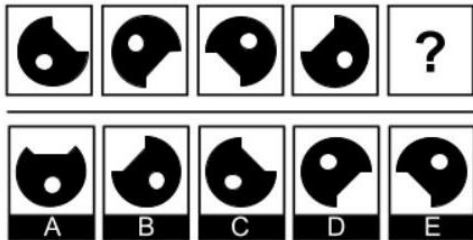
Student: But that's not true. My father has type B blood and I have type O blood.

The student has most likely misinterpreted the professor's remark to imply that:

- only people with type O blood can have children with type O blood.
- people with type B blood invariably have children with type O blood.
- people with type O blood cannot have children with type B blood.
- what is true of one child in the family must also be true of all children in that family.

Multiple Choice Question

Which of the following boxes should replace the question mark (?) to complete the pattern?



A

B

C

E

Multiple Choice Question

In the given question, a few statements have been given followed by two conclusions based on them. Consider the statements to be true, and answer which of the given conclusions logically follows the statement.

Statement I: All plates are cups.

Statement II: All cups are spoons.

Statement III: Some spoons are forks.

Statement IV: All forks are bowls.

Conclusion I: All bowls are plates.

Conclusion II: At least some spoons are bowls.

Conclusion III: All cups are not plates.

Conclusion IV: All plates being spoons is a possibility.

All conclusion follows.

Only conclusion I follows.

Only conclusions II and IV follow.

Only conclusion II follows.

Multiple Choice Question

The question consists of five statements labeled A, B, C, D, and E which when logically ordered form a coherent passage. Choose the option that represents the most logical order.

- A) Choose well, choose sensibly, and choose a single one.
- B) The mere form of speech excites the activity of separate brain cells, and somehow helps in relieving the mind from the fatigue caused by mundane life chores.
- C) The process of reading for pleasure in some other language entertains the mind and enlightens it with a different sequence and emphasis of ideas.
- D) Concentrate upon that one.
- E) Do not be content until you find yourself reading it with real enjoyment.

 ADECB BACDE CBAED DCABE

Multiple Choice Question

What is the synonym of the word "MODEST"?

Humble

Current

Clever

Rag

Multiple Choice Question

What is the synonym of the word "PROLONG"?

Reserve

Wait

Inquire

Extend

Multiple Choice Question

Read the passage below and answer the question that follows.

Opera refers to a dramatic art form, originating in Europe, in which the emotional content is conveyed to the audience as much through music, both vocal and instrumental, as it is through the lyrics. By contrast, in musical theater an actor's dramatic performance is primary, and the music plays a lesser role. The drama in opera is presented using the primary elements of theater such as scenery, costumes, and acting. However, the words of the opera, or libretto, are sung rather than spoken. The singers are accompanied by a musical ensemble ranging from a small instrumental ensemble to a full symphonic orchestra.

Question:

It is pointed out in the reading that opera _____.

- has developed under the influence of musical theater.
- is not a high-budget production.
- is a drama sung with the accompaniment of an orchestra.
- is the most complex of all the performing arts.

Multiple Choice Question

Read the sentence given below. Replace the underlined/italicized part of the sentence with the grammatically correct phrase from the options given below.

Over the course of three decades spent as a field vet with the National Forest Service, Dr Lynn treats several injured large mammals escaping from traps and snares set by poachers.

- Dr Lynn treats several injured large mammals escaping from traps and snares set by poachers
- Dr Lynn treated several injured large mammals escaping from traps and snares set by poachers
- Dr Lynn has treated several injured large mammals that escaped from traps and snares set by poachers
- Dr Lynn has treated several large mammals who escaped from traps and snares set by poachers

Multiple Choice Question

What is the synonym of the word "NOVICE"?

Ratify

Accept

Obvious

Beginner

Multiple Choice Question

Choose the words that, when inserted in the sentence to replace the blanks, best fits the meaning of the sentence.

Fate smiles _____ those who believe _____ themselves and work hard to achieve their dreams.

over, at

on, in

at, on

over, within

Multiple Choice Question

Read the sentence given below. Replace the underlined/italicized part of the sentence with the grammatically correct phrase from the options given below.

Some economic historians doubt the role of fiscal stimuli in ending the Great Depression, and believe that if not for the Second World War beginning when it did, the depression would last many years longer.

- if not for the Second World War beginning when it did, the depression would last many years longer
- if the Second World War had not begun when it did, the depression might have lasted many years longer
- if the Second World War had not begun when it did, the depression would have lasted many years longer
- if the Second World War had not begun when it did, the depression should have lasted many years longer

Multiple Choice Question

Choose the word that, when inserted in the sentence to replace the blanks, best fits the meaning of the sentence.

The thin girl in the ally walked carefully with her multiple bags and books _____ she should fall.

quash

quell

lest

though

Multiple Choice Question

Read the sentence given below. Replace the underlined/italicized part of the sentence with the grammatically correct phrase from the options given below.

The Indian rhinoceros, unlike those in Africa, uses its incisors rather than its horns to protect itself.

- The Indian rhinoceros, unlike those in Africa, uses its incisors rather than its horns to protect itself.
- The Indian rhinoceros, unlike the one in Africa, uses its incisors rather than its horns to protect itself.
- Rhinoceroses found in India, unlike those found in Africa, use their incisors rather than their horns to defend themselves.
- Indian rhinoceroses, unlike those in Africa, use their incisors rather than their horns to defend themselves.